

Figure It Out

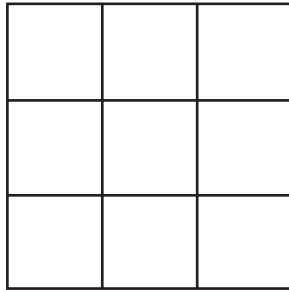


Figure 1

*How many squares can you find?
How many rectangles can you find?*

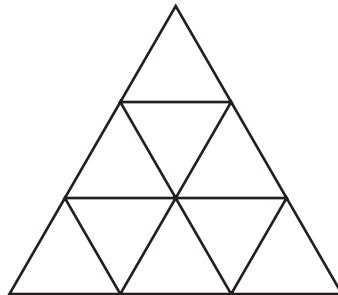


Figure 2

How many triangles can you find?

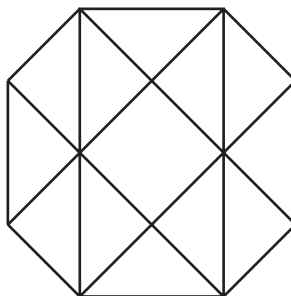


Figure 3

How many triangles can you find?